


Ready for Second Summer Homework



Thursday

Fix the sentence:

I love to pick flowers at the park?

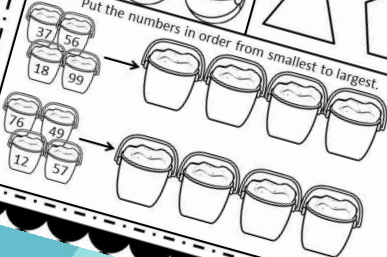
Color the adjectives blue. Color all other words orange.

red dog tall
pretty two she
run fun go

Draw a line to cut each shape in half.




Put the numbers in order from smallest to largest.



Friday

Week 6
Day 5

5's. Write the next number.



Peyton picked 3 strawberries, 4 peaches, and 6 apples. How much fruit does Peyton have altogether?

Show your work here:

Answer: _____

Circle the word that goes with the picture.



sharp
shark
shack



ship
shirt
shake

"Wake up Lee!" his brother said to him. "It is time to go outside to play." Lee woke up and put on his shoes. "Let's go!" Lee shouted. They ran out the door. As soon as they got outside, they started to get wet. "Oh no!" Lee said. The boys went back inside and found a game to play for the rest of the day.

1. Why did the boys get wet when they went outside?
2. How do you think Lee felt when he got wet?

Directions:


This packet includes work for 8 weeks during the summer. I copy these pages front and back and send them home. At the end of the year I tell the parents (note included) that if their child completes this homework over the summer break, they will receive a reward when they get back. The kids love the challenge, and I usually have the majority of my class bringing me the packet on the first day of school! Enjoy and have a **WONDERFUL** summer!

Fight the Summer Slide!

Parents and Guardians,

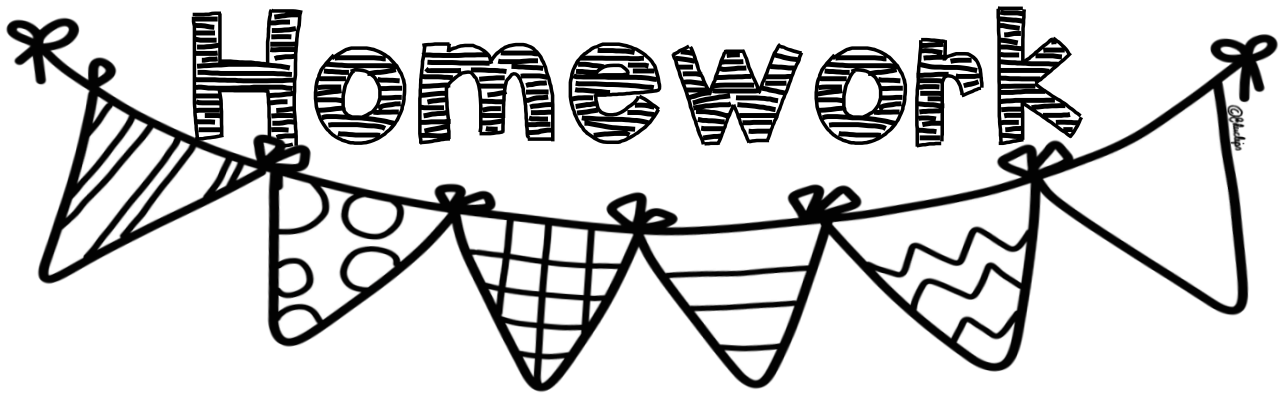
Research has shown that during the summer months, children who do not practice their skills will decline from where they were before the school year ended! We have worked so hard to get where we are that we do not want to go anywhere but forward. This packet has skills to keep your child's brain sharp all summer long. If your child completes this packet and brings it to my classroom by _____, they will receive a treat!

Thanks for your support,



Summer

Homework

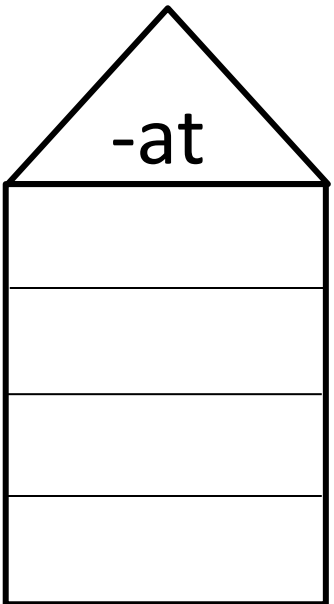


M O N D A Y

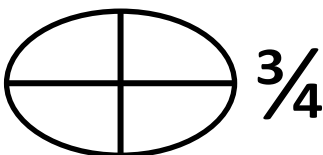
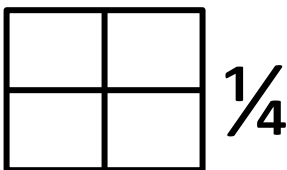
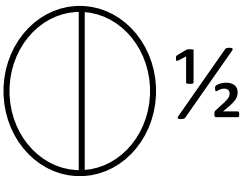
Week: 1
Day: 1

What was your favorite thing you did today?


Write words in the "-at"
family



Shade in the fractions:




Fill in the missing sounds:



Ba _ _



_ _ eck



fi _ _

T U E S D A Y

Week: 1
Day: 2

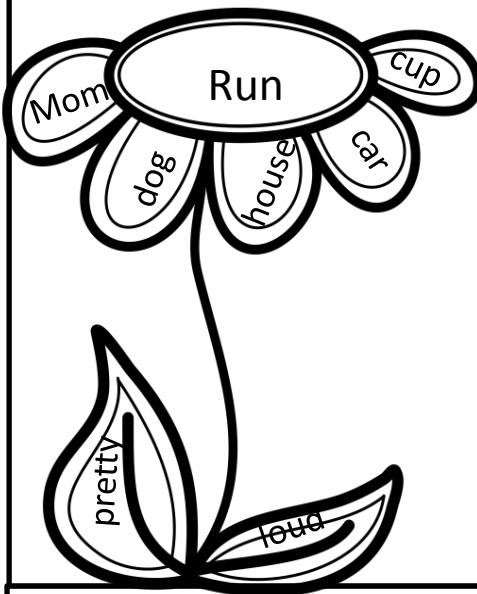
Read these nonsense words to an adult:

1. Bax
2. Sniz
3. Trag
4. Chep
5. Plad
6. Orta

Color adjectives green

Color nouns pink

Color verbs yellow



Fill in the missing numbers:

16	17		19	
56		58	59	
	98	99	100	
33		35		37
	110	111		113

The girl loved to play outside. One day, she went outside and found a turtle. She was so afraid that the turtle would not be able to get to water. She brought the turtle inside! Her mom was mad that she brought a turtle in the house.

1. Why did the girl bring the turtle in the house?

2. What would you do if you saw the turtle?

w e d n e s d a y

Week: 1
Day: 3

Fix the sentence:
the girl went two swim in the pool?

Color long U words blue.
Color short U words red.




Fill in the graph

Pizza	3
Chips	4
Gum	6


6			
5			
4			
3			
2			
1			
	Pizza	Chips	Gum

Use a paperclip on the spinner and write a sentence with the word.

- _____
- _____
- _____



T h u r s d a y




Finish the pattern:



Circle the words that don't belong

1. Blue, Yellow, Cat
2. Soft, Rough, Hard
3. Cat, Sun, Horse
4. Jump, Swim, Girl
5. School, Train, Car
6. Quick, Slow, Fast

Draw the hands to match the time



5:00



7:30



11:00



3:30



12:00



1:30

Watch a TV show. Write three sentences to tell what happened first, second, and last in the show.

1. _____

2. _____


3. _____

F r i d a y

Week: 1
Day: 5

Would you rather eat ice cream or popsicles?

Color the verbs
yellow and the nouns
orange



Find the larger number, write $<$, $>$,
or $=$.

38 41

39 34

19 13

90 37

102 112

12 28

68 54

66 17


Fill in the missing sounds:



Bru ____



____ air



mou ____

M O N D A Y

Week: 2
Day: 1

Combine the words to make a contraction:

Do + Not = _____

It + Is = _____

Have + Not = _____


Will + Not = _____

Can + Not = _____

Is + Not = _____



Color the pictures that have "CH" in them.



Add or Subtract:

$15+6=$

$13-10=$

$18-9=$

$14+7=$

$16+5=$

$20-8=$

Would you rather swim in a pool or at the beach? Why?


T u e s d a y

Week: 2
Day: 2


Skip count by 2's

22, 24, _____, 28, 30, _____, 34, _____, 38, 40, _____

4, 6, 8, _____, 12, 14, _____, _____, 20, 22, _____, 26



Write words in the
"ar" family



Fill in the missing addend

8 + _____ = 12

3 + _____ = 10

5 + _____ = 11

9 + _____ = 14

7 + _____ = 16

4 + _____ = 17

Sort the words into nouns and pronouns

Nouns

Pronouns

She
Mrs. Smith
It
Ball
His
Sam
Her
Pencil

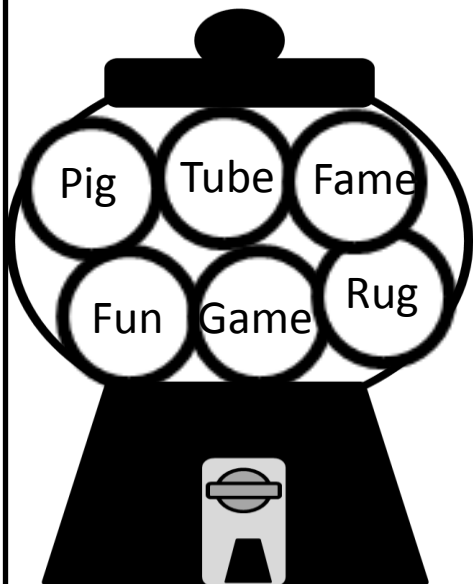
W e d n e s d a y

Week: 2
Day: 3

Fix the sentence:

Sam katie and john went to mcdonalds.

Color the true answers green and the false answers red.



Write the amount of each set of coins:



Read the story and answer the questions.

Pam went to the beach with her dad. Her dad said “We should look for sea shells!” They walked down the beach looking for shells. They found a small, black shell on the beach. Her dad told her she found a sharks tooth!

1. Where did Pam find the sharks tooth?

2. Have you ever found anything amazing?

F r i d a y

Week: 2
Day: 5

Write four adjectives to describe a flower:

1. _____


3. _____

2. _____

4. _____



Circle the beginning sound



CH

WH




GL


FL

Add and then use the key to color in the sections.

- 10= Red
- 13= Peach
- 18= yellow
- 12= blue
- 15= green



Write the steps you take to build a sandcastle:






Handwriting practice lines consisting of four sets of solid top and bottom lines with a dashed middle line.

M O N D A Y



Color living things red. Color nonliving things green.



Circle the sets of words that rhyme

type/hype

throw/gown

stop/mop

start/cart

help/snap

Write ten more and ten less:

36

48

75

29

89

Read a book. Draw a picture of the main character and write a summary about the story:

Handwriting practice lines consisting of a solid top line, a dashed middle line, and a solid bottom line, repeated five times.

T U E S D A Y

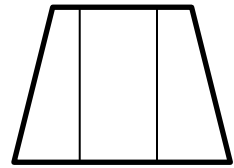
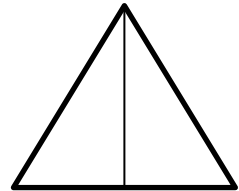
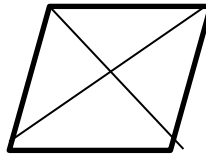
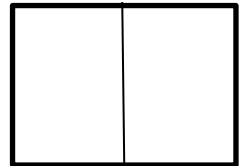



Color the pictures that end in "sh"



Solve the riddle:
I am thinking of a
number.
It is less than 90.
It is greater than 80.
It has a 6 in the ones
place.
What number is it?

Color the shapes that
show halves.




Put the correct punctuation after each sentence:

1. Stop before you get hurt

2. Where is the library

3. I want some ice cream



W e d n e s d a y



Would you rather plant a flower or a vegetable?

Draw the other half to make it symmetrical



Solve the word problem:



There were 12 bumblebees. 7 bumblebees flew away. How many bumblebees are left?

Show your work:

Answer: _____

Following directions practice:

Color the third flower orange.

Color the fifth flower yellow.

Color the flower next to the fifth flower pink.

Color the first flower purple.

Color the only flower left blue.



T h u r s d a y



Cross out the pictures that don't belong



Week: 3
Day: 4

Write a synonym for each word:

Tasty= _____

Happy= _____

Funny= _____

Big= _____

Angry= _____

Write how many tens and ones each number has.

67
Tens Ones

39
Tens Ones

It was going to be a fun day! First, Sam was going to the park.
Next, he was going to go swimming. Sam liked to eat sandwiches.
Last, he wanted to go to the mall.

1. What did Sam do first?

2. Which sentence did not belong in the story?

3. Have you had a day like Sam's?

F **r** **i** **d** **a** **y**




Week: 3
Day: 5

Fix the sentence:
The fish was swim fast in the water?


Measure the items:



_____ Balls



_____ Balls



_____ Balls

Sort the Pronouns and Nouns

Pronouns	Nouns

It	Sam	Taco
Her	They	Girl

Favorite Color

Number of votes	5			
	4			
	3			
	2			
	1			
	Red	Blue	Yellow	

Colors

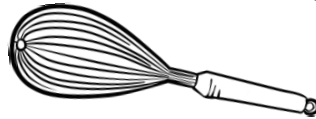

Favorite Colors

Red	1
Blue	4
Yellow	5

M O N D A Y

Week: 4
Day: 1

Color the pictures that have TH in them



Fill in the number chart

1		3			6			10
	12					17		19
			24				28	
31				35				39
		43			46			
	52			55			58	60
			64			67		
71					76			79
		83		85			88	90
	92				96			99

Combine the words to make a compound word

1. Foot + Ball= _____

4. Hot + Dog= _____

2. Butter + Fly= _____

5. Dog + House= _____

3. Cup + Cake= _____

6. Basket + Ball= _____

T U E S D A Y

Week: 4
Day: 2

Fix the sentence:
summer is the best season ever.

Solve the word problem:

Mrs. Smith had 19 popsicles.
She gave 16 to her students.
How many did she have left?

Show your work:

Answer: _____

Sort the equations

True	False

$9-5=7$	$8+3=11$	$6+3=9$
$17-4=14$	$11+6=17$	$18-5=9$

- Book
- Jump
- Apple
- Find
- Zipper
- Rain
- Thorn
- Look
- Sing
- Water

Put the words in the box in alphabetical order:

1. _____
2. _____
3. _____
4. _____
5. _____
6. _____
7. _____
8. _____
9. _____
10. _____

W e d n e s d a y

Week: 4
Day: 3

Color the nouns red and the verbs blue

Jump	Sneeze	Molly	Dog
Teacher	Run	Store	Read

Write three sentences to tell me about your day.

1. _____

2. _____

3. _____


Spin the spinner. Write in the number and solve.

8 + =

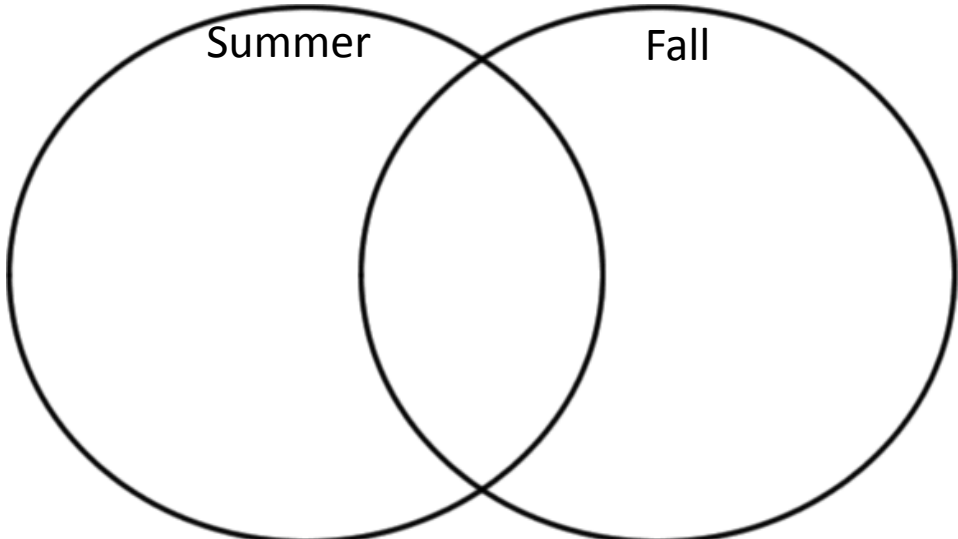
6 + =

18 - =

14 - =



Compare and Contrast Summer and Fall



T h u r s d a y

Week: 4
Day: 4

Color the pennies red, nickels blue, dimes green, and quarters purple.



Write 5 adjectives to describe the beach.

1. _____
2. _____
3. _____
4. _____
5. _____



What can you infer from the picture?

1. The man is happy.
2. The man is shouting.
3. The dog will not listen.

Ready a story. Write what the problem and solution was in the story.

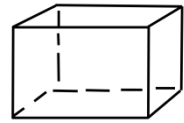
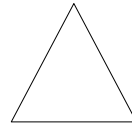
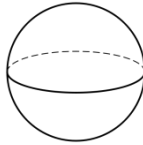
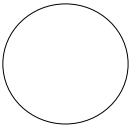
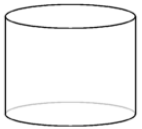
Problem: _____

Solution: _____


F r i d a y

Week: 4
Day: 5

Color the 3D Shapes Blue and the 2D shapes yellow.



Read the sentence. Find the preposition and draw the object where the preposition tells you to.



1. Draw a flag on top of the sand castle.
2. Draw a small person in the door of the castle.
3. Draw a sunshine above the castle.

Read the question. Draw the hands on the clock and write the answer in the blank.

Sarah went to lunch at 11:00. She spent two hours at lunch. What time did she leave lunch?



Match the related facts.

$18+3=21$

$16-4=12$

$15+6=21$

$13+4=17$

$23-6=17$

$21-6=15$

$21-3=18$

$17-13=4$

$17+6=23$

$12+4=16$

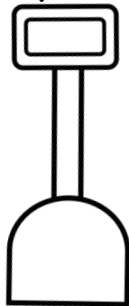


M O N D A Y

Week: 5
Day: 2

Fix the sentence:

I cant wait two go to second grade!

Color the long vowel words red
and the short vowel words blue.



$$\begin{array}{r} 41 \\ +36 \\ \hline \end{array} \quad \begin{array}{r} 24 \\ -12 \\ \hline \end{array} \quad \begin{array}{r} 37 \\ +32 \\ \hline \end{array}$$

$$\begin{array}{r} 98 \\ -46 \\ \hline \end{array} \quad \begin{array}{r} 14 \\ +81 \\ \hline \end{array} \quad \begin{array}{r} 77 \\ -24 \\ \hline \end{array}$$

$$\begin{array}{r} 81 \\ +16 \\ \hline \end{array} \quad \begin{array}{r} 74 \\ -31 \\ \hline \end{array} \quad \begin{array}{r} 16 \\ +42 \\ \hline \end{array}$$

"Come on mom!" said Ann. She ran up the stairs to tell her mom that it was time to go. "Okay Ann. I am coming" her mom said. Ann went out side to wait by the car. Mom came out of the door holding a towel and sun screen. "I just can't wait" said Ann.

1. Where do you think Ann is going?

2. What clues told you where Ann was going?

T U E S D A Y

Week: 5
Day: 2

Make these sentences a compound sentence:

Alisa loves to cook. She helps her mom make pasta.

Find the "oi" words in the puzzle below and color them in.

Soil
Coin
Point
Oil

s	c	o	i	n
c	o	r	t	m
p	g	i	k	a
o	y	z	l	h
i	f	o	i	l
n	t	p	c	s
t	r	o	i	l

Place the commas where they should go in each sentence.

1. The flowers are green blue and yellow.
2. Camyron Sam and Olivia are friends.
3. I love to eat at McDonalds Burger King and Subway.
4. The park is fun because it has swings slides and monkey bars.
5. Charles Elise and Lee like to have a race.


W e d n e s d a y

Week: 5
Day: 3

Finish skip counting by 5's:

5 10 15

Circle the beginning sound:



Tr
Fl
Sn

Add 3 digits together.

3	6	7
1	3	2
<u>+2</u>	<u>+1</u>	<u>+3</u>

4	5	2
1	2	3
<u>+3</u>	<u>+4</u>	<u>+5</u>



Sh
Ch
Wh

Place the correct punctuation behind each sentence.

1. The dog runs super fast
2. What do you want to eat
3. It is time to go swimming



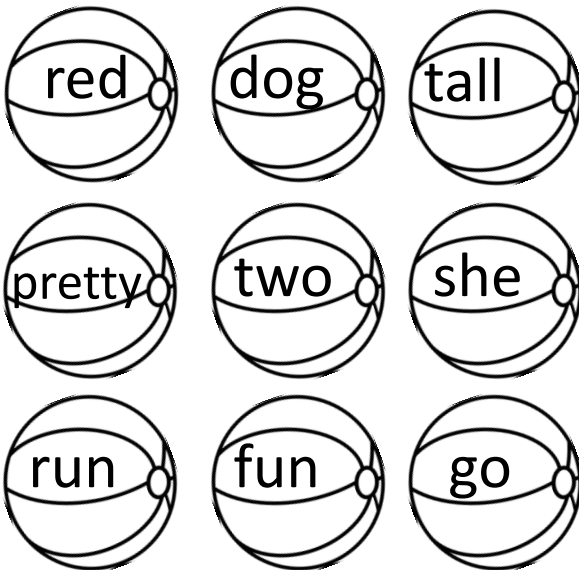
T h u r s d a y

Week: 5
Day: 4

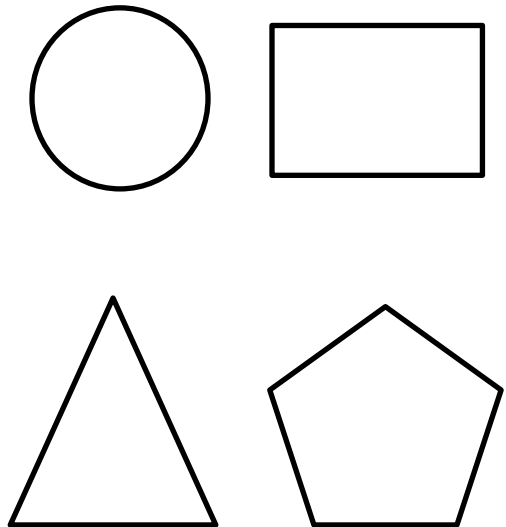
Fix the sentence:

i love to pick flowers at the park?

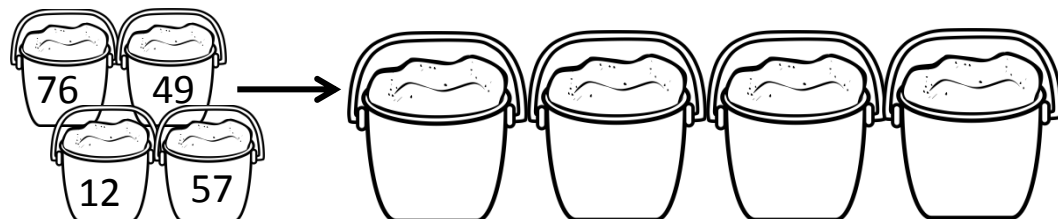
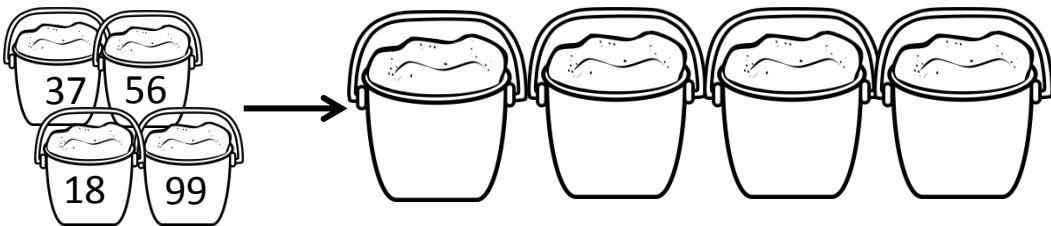
Color the adjectives blue. Color all other words orange.



Draw a line to cut each shape in half.



Put the numbers in order from smallest to largest.



F r i d a y

Week: 5
Day: 5

Fill in the missing vowel:



D__ce

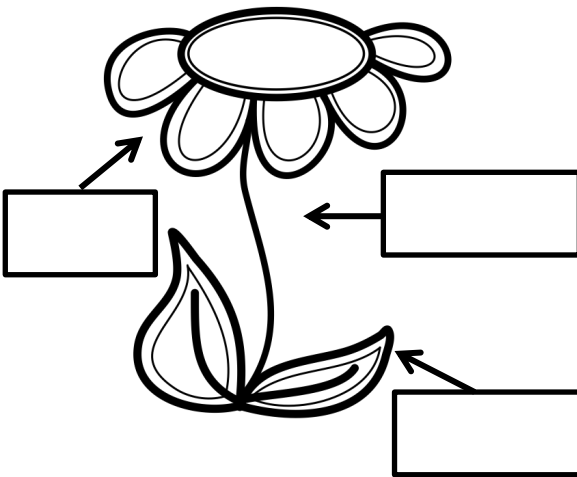


Gl__be



D__me

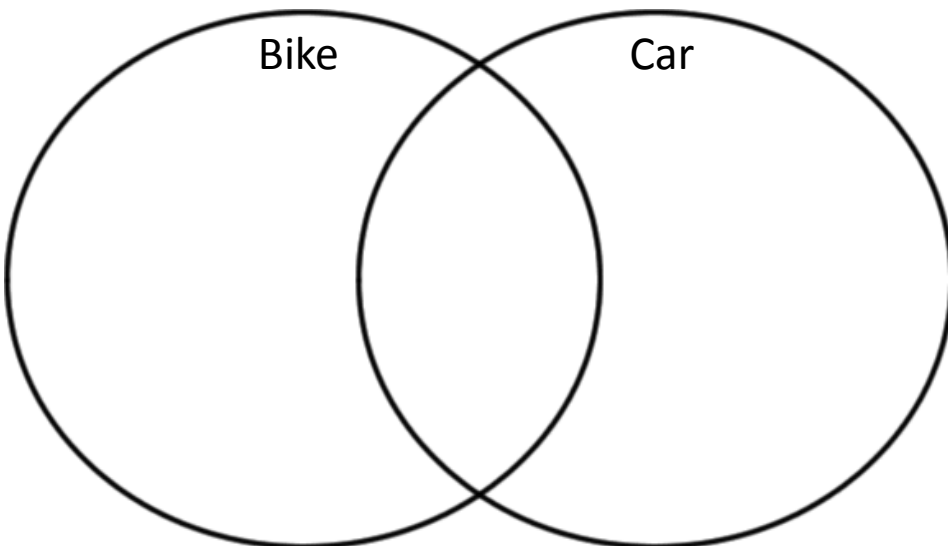
Label the parts of the plant.




Draw the amount of pennies it would take to make each coin.



Tell how a bike and a car are the same and different.



M O N D A Y



Where do you want to go on vacation?

How many words can you make using these letters?

A	C	T
R	P	O
H	S	M

Add the numbers together

$3+3+2=$

$4+8+2=$

$5+3+1=$

$6+2+3=$

$7+1+0=$

$7+6+2=$

$5+3+6=$


$4+1+8=$

Did you know that you can find sharks teeth on some beaches? In the ocean, sharks lose their teeth, just like you lose yours! The teeth fall out of the sharks mouth and go into the ocean. Then, the teeth get washed up to the shore. The next time you are at the beach, look for some sharks teeth!

1. How are you like a shark?



2. Would you want to find a sharks tooth? Why or why not?

W e d n e s d a y



The girl has 14 crayons. The boy has 3 fewer crayons than the girl. How many crayons does the boy have?

Sound out each sound of the word. Touch the dots to help:



Look out your window.
What is the weather like?

Use the calendar to help you answer the questions:

June


S	M	T	W	T	F	S
					1	2
3	4	5	6	7	8	9
10	11	12	13	14	15	16
17	18	19	20	21	22	23
24	25	26	27	28	29	30

1. What day of the week is the 8th on? _____
2. How many Fridays are in June?

3. What is the date of the first Tuesday in June?

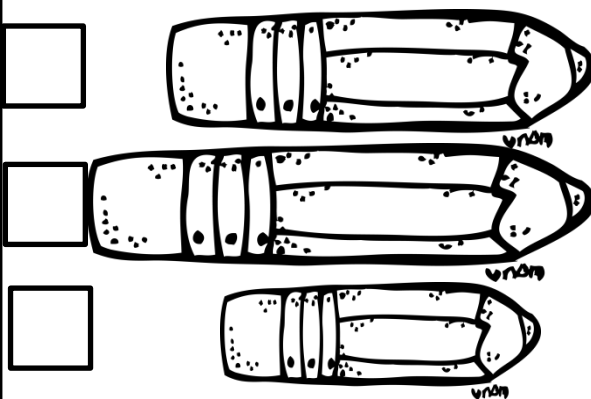
4. What day of the week is the last day in June? _____

T h u r s d a y



Fix the sentence:
the apple tree blooms in the spring tim.

Write 1, 2, and 3 in the boxes to order the pencils from shortest to longest.



Circle the conjunction that goes in the blank.

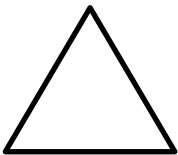
1. The dog loves food ____ water.

but and or

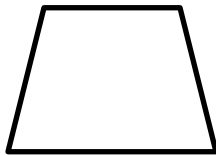
2. Choose candy ____ ice cream.

but and or

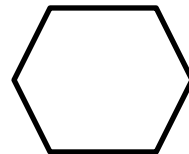
Write the number of sides under each shape.



Sides _____



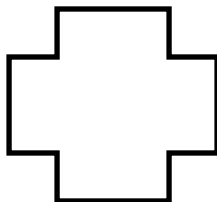
Sides _____




Sides _____



Sides _____




Sides _____



Sides _____

F R I D A Y



Count by 5's. Write the next number.




Peyton picked 3 strawberries, 4 peaches, and 6 apples. How much fruit does Peyton have altogether?


Show your work here:

Answer: _____

Circle the word that goes with the picture:



sharp
shark
shack



ship
shirt
shake

“Wake up Lee!” his brother said to him. “It is time to go outside to play.” Lee woke up and put on his shoes. “Let’s go!” Lee shouted. They ran out the door. As soon as they got outside, they started to get wet. “Oh no!” Lee said. The boys went back inside and found a game to play for the rest of the day.

1. Why did the boys get wet when they went outside?

2. How do you think Lee felt when he got wet?

M O N D A Y

Week: 7
Day: 1



Finish the pattern:

A, A, B, B, A, A, ____, ____, A, ____, B, B, A, A, ____, B, ____, A, B, B



Show 5:30



_____ : _____

Write the fact family for 7, 4, and 11.

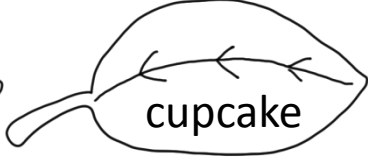
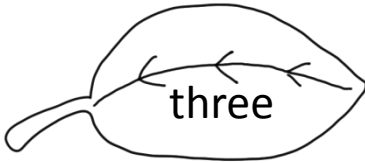



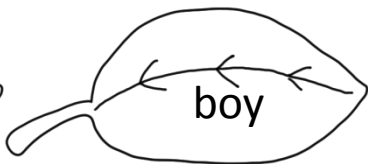
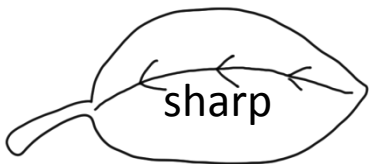
$$\underline{\quad\quad} + \underline{\quad\quad} = \underline{\quad\quad}$$

$$\underline{\quad\quad} + \underline{\quad\quad} = \underline{\quad\quad}$$

$$\underline{\quad\quad} - \underline{\quad\quad} = \underline{\quad\quad}$$

$$\underline{\quad\quad} - \underline{\quad\quad} = \underline{\quad\quad}$$

Color the leaves green if it is an adjective. Color the leaves orange if it is not an adjective.



T U E S D A Y

Week: 7
Day: 2



Fix the sentence:
the dog barked at his bone

The party starts at 6:00. It is 4:00 right now. How many more hours until the party starts?

Show your work:

Answer: _____

Write adjectives to describe the bumblebee.



Write a 1, 2, and 3 to order the events in order from beginning to end.

- | | |
|---|--|
| I ate it up! <input type="checkbox"/> | <input type="checkbox"/> I found my swimsuit. |
| First, I got the bread. <input type="checkbox"/> | <input type="checkbox"/> It's time for the pool. |
| Then, I put peanut butter and jelly on it. <input type="checkbox"/> | <input type="checkbox"/> I jumped in! |

w e d n e s d a y

Week: 7
Day: 3



Circle the one that doesn't belong.



Color the pronouns red and all other words green.



Fill in the missing numbers:

39, _____, 41, 42, 43, _____

_____, 98, 99, 100, _____, 102

56, 57, _____, 59, 60, _____

110, 111, _____, 113, _____

_____, _____, 23, 24, 25, _____

What do you think your teacher is doing this summer?

Handwriting practice lines consisting of multiple sets of solid top and bottom lines with a dashed middle line for letter height guidance.

T h u r s d a y

Week: 7
Day: 4



Would you rather have a dog or a cat? Why?

Write words that rhyme:

s t u m p




Fill in the missing sign:

15 6 = 21


25 5 = 20

13 9 = 22

16 4 = 12



Write what you know about a police officer.

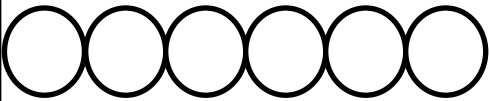


F r i d a y


Week: 7
Day: 5




Circle the 4th circle and the 6th triangle.



Color the pictures that have ch in them yellow and all other pictures blue.



Cortland went to the store at 1:00. He stayed there for 2 hours. What time did he get home? Draw the hands on the clock.




Brushing your teeth is very important. When you brush your teeth, you should make sure that you are brushing every single tooth in your mouth. I love to play baseball. Brushing your teeth will take about two minutes. If you do not take care of your teeth, your teeth will rot.

1. What sentence does not belong?

2. Why is brushing your teeth important?

M O N D A Y




Week: 8
Day: 1


Circle the words that are spelled correctly:

Are Hav Ther Out Arownd Come From


Color the true equations red and the false equations yellow.




Circle the fractions that have equal parts.



Pretend you are a chick. What would you do each day?



Tuesday

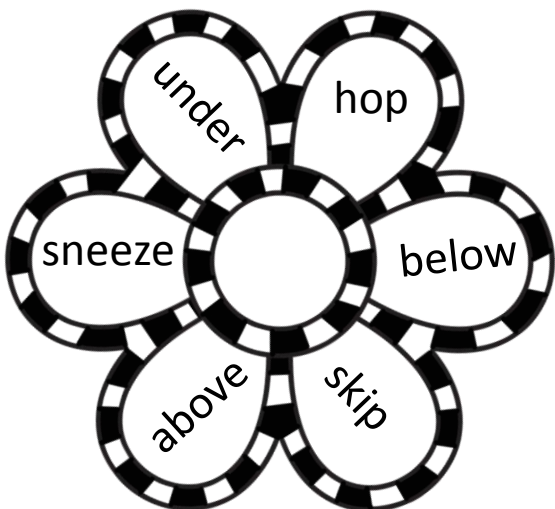


Week: 8
Day: 2

Predict what would happen if you put your ice cream in the sun.



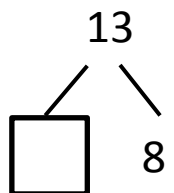
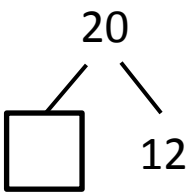
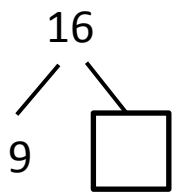
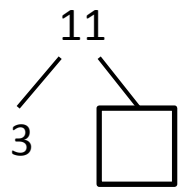
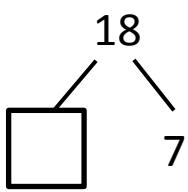
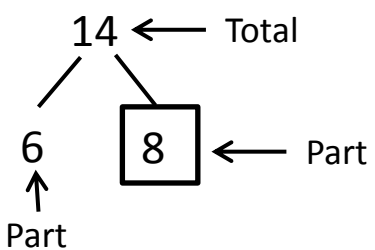
Color the prepositions blue and the verbs red.




Write 3 equations in each box to equal the sum shown.

Sum of 16	Sum of 20

Fill in the missing number:



W e d n e s d a y



Week: 8
Day: 3

Finish the pattern:



Write a fact about the summer:

Handwriting practice lines consisting of solid top and bottom lines with a dashed middle line. There are four sets of these lines provided for writing.

Circle the number that has an 8 in the tens place and a 6 in the ones place:

86 98 68


Circle the number that has a 2 in the tens place and a 9 in the ones place:

92 209 29

Color the long vowel words red and the short vowel words blue.

Red	Tube	Tug	Bag	Scan
Tear	Tie	Flag	Still	Bite
Stay	Ran	Beach	Score	Bun
Fan	Bug	Seat	Fig	Pass

T h u r s d a y



Week: 8
Day: 4

Write 4 words that have -ea in them.

You have 2 dimes and 3 pennies. You want to buy a car for 12¢. Do you have enough money?



Answer: _____

Add the three digits together:

$$\begin{array}{r} 8 \\ 5 \\ +2 \\ \hline \end{array} \quad \begin{array}{r} 3 \\ 1 \\ +6 \\ \hline \end{array} \quad \begin{array}{r} 4 \\ 2 \\ +5 \\ \hline \end{array} \quad \begin{array}{r} 9 \\ 1 \\ +2 \\ \hline \end{array}$$


$$\begin{array}{r} 5 \\ 9 \\ +1 \\ \hline \end{array} \quad \begin{array}{r} 2 \\ 1 \\ +7 \\ \hline \end{array} \quad \begin{array}{r} 8 \\ 4 \\ +2 \\ \hline \end{array} \quad \begin{array}{r} 6 \\ 1 \\ +4 \\ \hline \end{array}$$

Read each sentence. Choose the correct verb to complete the sentence.


I want to go _____ tomorrow.
(camping, camped)

My mom likes to _____ every day.
(sing, singer)

The dentist _____ my teeth.
(cleaned, cleans)



F r i d a y



Week: 8
Day: 5

What do you think your first day of second grade will be like? Write in complete sentences!

Handwriting practice area consisting of eight sets of horizontal lines. Each set includes a solid top line, a dashed middle line, and a solid bottom line.

Illustrate your sentences:

A large rectangular box with a double-line border, intended for drawing an illustration related to the student's writing.

TERMS OF USE

Thank you for downloading my product!

By downloading or purchasing this electronic file, you are agreeing to the following terms:

This is for personal/single classroom use only.

No part of this download can be distributed, resold, copied, edited without permission of

the author. Violators are subject to the penalties of the Digital Millennium Copyright

Act. To purchase additional sharing licenses, please visit my store. All content of this

document are under copyright protections including text, content, graphics, and fonts. All

graphics and fonts are also protected by copyright from their original author/artist.

You may share the cover or content image only of this product in any social medias as long as you link back to my TpT store.

For more info, products, activities, and ideas, you can find me at:

TpT:

<https://www.teacherspayteachers.com/Store/Forever-In-First>

credits

