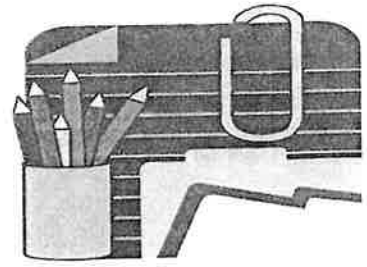


♥ Welcome to

GRADE 3



Dear Future 3rd Graders,

My name is Mrs. Kerr and I will be your 3rd Grade Teacher. I am really looking forward to getting to know all of you! I know we are going to have an exciting and fun time learning together! The following is a list of materials and supplies you will need for next year. Along with these supplies, there is a \$ 25⁰⁰ fee for our Scholastic News Magazine. Please turn in money (cash or check) the first week of school.

Supply List for Third Grade:

- 5 Sharpened Pencils (No Pens)
- 2 Erasers
- 1 Ruler (inches and centimeters)
- 2 Glue sticks
- 3 Single Subject Notebooks
- 1 Folder (2-pocket)
- 1 Box of Crayons
- 1 Pack of Washable Markers
- 1 Pair of Scissors
- Pencil Case/Pouch
- 2 Boxes of Tissues
- 2 Rolls of Paper Towels
- 1 Pack of Clorox Wipes





Attached to this letter is the Summer Reading and Math Packet. In addition, summer reading logs will be sent home the last week of school. Students are encouraged to read at least 60 minutes a week and keep track of minutes in their logs. All packets and reading logs should be returned the first week of school. If you have any questions please feel free to contact me at Kerr@stjosephbristol.org
Have a great summer!

Flat Teacher Directions

Ready for your summer adventure with me? Read the directions below to get started!!!

1. Before we can go on any adventures, it's important that you read about Stanley's adventures first. Your first task is to read any *Flat Stanley* book you'd like!
2. After you've read a Flat Stanley book, you will need to write a summary of the book. Use the graphic organizer on the next page to help you!
3. Now, you are finally ready for your adventure with ME! I can't wait to see what we do together. You may take me on as many adventures as you'd like. Just make sure to keep these things in mind:
 - a. Don't lose me! Make sure I stay safe at all times!
 - b. Make sure you take pictures of me or with me while you're on your adventure so you can share them with the real Mrs. Kerr at kerr@stjosephbristol.org!
 - c. Don't forget to write about your favorite adventure using the graphic organizer, "My Adventure with Flat Teacher"!







Name: _____

My adventure With Flat Teach!



A writing template consisting of a large rounded rectangle on the right side. Six horizontal lines extend from the left edge of this rectangle to the left margin, creating a space for writing.

A section of the page with four horizontal lines for writing.


A writing template consisting of a large rounded rectangle on the left side. Six horizontal lines extend from the right edge of this rectangle to the right margin, creating a space for writing.

Name: _____

SUMMER

Weeks - 1 and 2
(2 Sides)

Write an addition equation.




+ =

Count the objects and circle even or odd


Even

Odd

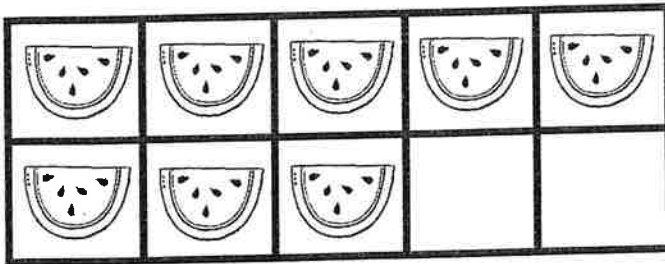


Complete the data table.

Objects	Tally mark
Spiral shell	
starfish	
Fan shell	

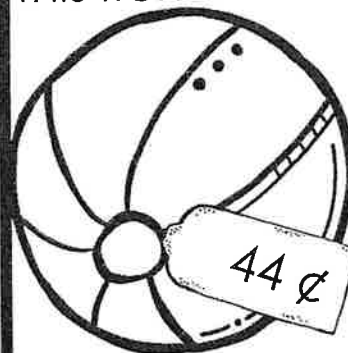


Fill in the missing place.




I need more to make 10.

Is there enough money to buy this item?




<input type="text"/> ¢	Yes
	No

Write an addition equation.



+ =

Draw an array for this equation.



$3 + 3 + 3 = 9$

Find each sum. Show your work.

$17 + 8$

$24 + 14$

$36 + 19$

$255 + 42$

$91 + 28$


$52 + 6$

Name: _____

SUMMER

Weeks - 3 and 4
(2 Sides)

Color the fraction.



Choose the correct answer.

A: Five hundred eighty two 548

B: Four hundred ninety six 496

C: Nine hundred sixty four 954



Joan found 36 seashells and Jessica found 28 seashells on the beach . How many seashells did they find together ?


Write the fact families.

$$\square + \square = \square$$

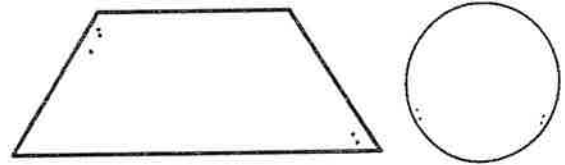
$$\square + \square = \square$$

$$\square - \square = \square$$


$$\square - \square = \square$$




Color the quadrilateral.



Color the taller giraffe.



Choose the correct answer.
What is 100 more than 547?



A	359
B	147
C	647

Find each difference. Show your work.

$307 - 25$

$842 - 37$

$513 - 74$

$617 - 608$

$324 - 159$

$400 - 123$

9 Name: _____

SUMMER

Weeks - 5 and 6
(2 Sides)

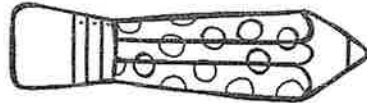
Solve this problem.

$$\begin{array}{r}
 648 \\
 - 329 \\
 \hline
 \end{array}$$

Measure the length of the pencils in centimeters.



_____ cm


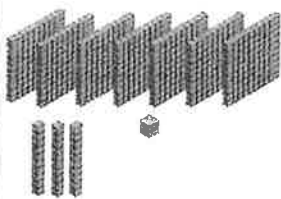


_____ cm

What is difference between the two pencils? _____

Sofia did 34 math problems on Tuesday .Then she did 17 more problems on Wednesday. How many math problems did she solve in all?

Compare two three-digit numbers . Write the numbers.






Fill in the missing places.

$6 + (4 + 3) =$

$(6 + 4) + \underline{\quad} =$


$\underline{\quad} + \underline{\quad} = \underline{\quad}$



write the number in expanded form.

Eight hundred thirty two = _____ + _____ + _____

Complete the sentence.
4 groups of 3 = _____



Find each sum. Show your work.

$319 + 245$	$567 + 185$	$306 + 88$
$87 + 65$	$423 + 89$	$387 + 513$

Name: _____


SUMMER

Weeks - 7 and 8
(2 sides)

Solve this problem.

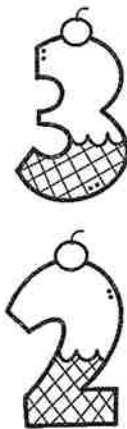
$$\begin{array}{r} 541 \\ + 221 \\ \hline \end{array}$$

Color $\frac{1}{2}$ of the group of items.



David did 35 addition problems and 44 subtraction problems at school. How many problems did he solve in all?

How many rows?



Solve the problem.



$$\begin{array}{r} 23 \\ 44 \\ 12 \\ + 13 \\ \hline \end{array}$$

Count by 10s



521

Complete the addition sentences.

$$80 + 6 = \underline{\quad}$$
$$9 \text{ tens} + \underline{\quad} \text{ ones} = 92$$

Find each difference. Show your work.

$27 - 6$

$32 - 14$

$81 - 8$

$53 - 22$

$90 - 79$

$216 - 14$